

Data Analysis questions

1. Analysis of times of minima

Figure 1 shows the light curve of the eclipsing binary V1107 Cas, classified as a W Ursae Majoris type.

Table 1 contains a list of observed minima of the light variation. The columns contain: the number of the minimum, the date on which the minimum was observed, the heliocentric time of minimum expressed in Julian days and an error (in fractions of a day).

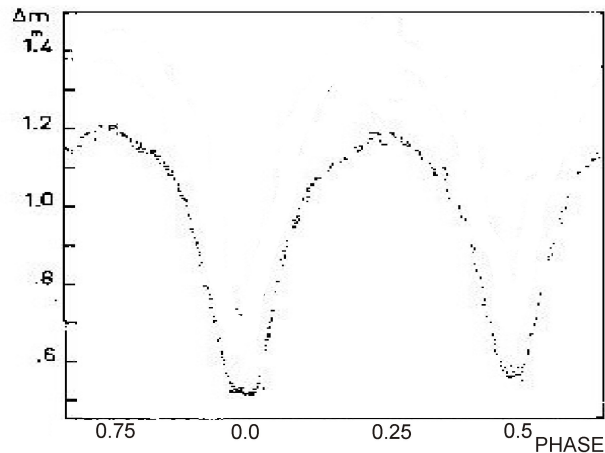


Fig. 1: Light curve of V1107 Cas.

Using these data:

- Determine an initial period of V1107 Cas, assuming that the period of the star is constant during the interval of observations. Assume that observations during one night are continuous. Duration of the transit is negligible.
- Make what is known as an (O–C) diagram (for “observed – calculated”) of the times of minima, as follows: on the x -axis put the number of periods elapsed (the “epoch”) since a chosen initial moment M_0 ; on the y -axis the difference between the observed moment of minimum M_{obs} and the moment of minimum calculated using the formula (“ephemeris”):

$$M_{\text{calc}} = M_0 + P \times E$$

where E , the epoch, is exactly an integer or half-integer, and P is the period in days.

- Using this (O–C) diagram, improve the determination of the initial moment M_0 and the period P , and estimate the errors in their values.
- Calculate the predicted times of minima of V1107 Cas given in heliocentric JD occurring between 19h, 1 September 2011 UT and 02h, 2 September 2011 UT.

No.	Date of minimum (UT)	Time of minimum (Heliocentric JD)	Error
1	22 December 2006	2 454 092.4111	0.0004
2	23 December 2006	2 454 092.5478	0.0002
3	23 September 2007	2 454 367.3284	0.0005
4	23 September 2007	2 454 367.4656	0.0005
5	15 October 2007	2 454 388.5175	0.0009
6	15 October 2007	2 454 388.6539	0.0011
7	26 August 2008	2 454 704.8561	0.0002
8	5 November 2008	2 454 776.4901	0.0007
9	3 January 2009	2 454 835.2734	0.0007
10	15 January 2009	2 454 847.3039	0.0004
11	15 January 2009	2 454 847.4412	0.0001
12	16 January 2009	2 454 847.5771	0.0004

Table 1: Observed times of minima of V1107 Cassiopeae

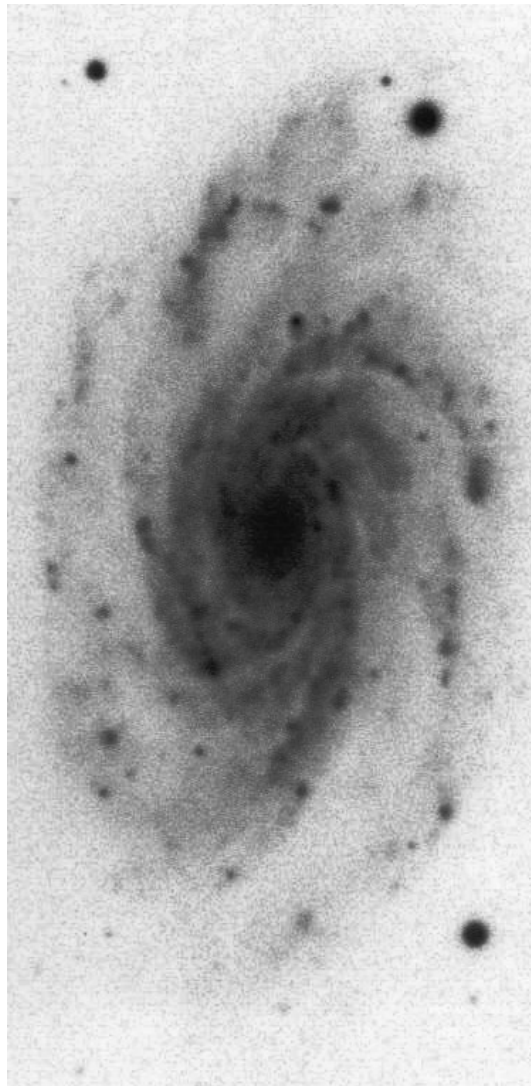
2. Weighing a galaxy

The attached images show a photograph of the spiral galaxy NGC 7083, which lies at a distance of 40 Mpc, and a fragment of its spectrum. The slit of the spectrograph was aligned with the major axis of the image of the galaxy. The x -axis of the spectrum represents wavelength, and the y -axis represents the angular distance of the emitting region from the core of the galaxy, where 1 pixel = 0.82 arcsec. Two bright emission lines are visible, with rest wavelengths of $\lambda_1 = 6564 \text{ \AA}$, $\lambda_2 = 6584 \text{ \AA}$.

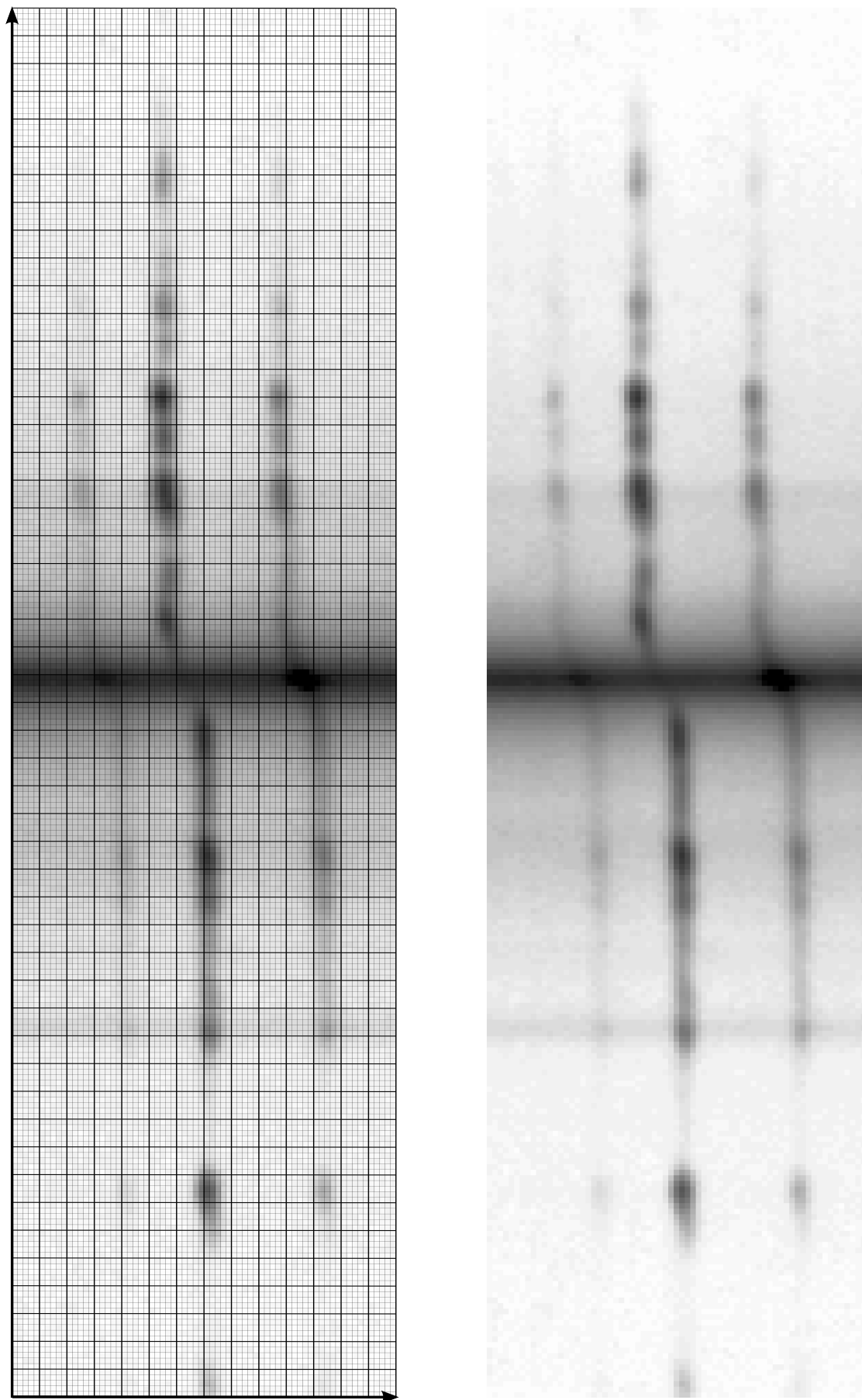
Use the spectrum to plot the rotation curve of the galaxy and estimate the mass of the central bulge.

Assumption: central bulge is spherical.

The photograph of the galaxy has the correct proportions.



NGC 7083



Spectrum of NGC 7083. Grid marks pixels.